

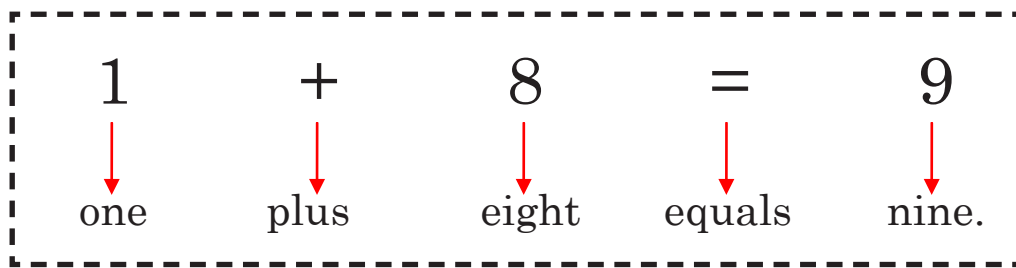
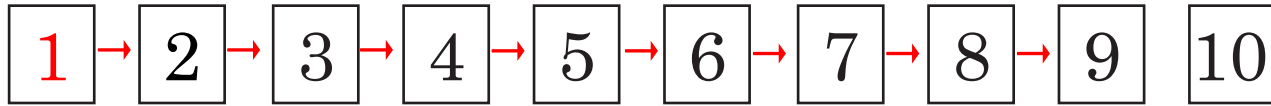
Addition

Unit 24.1

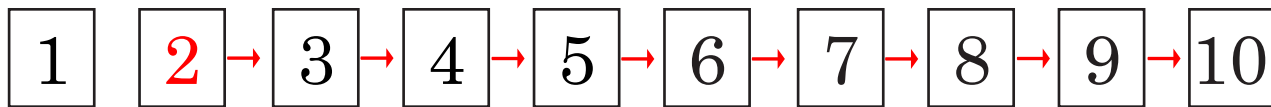
Adding 8 to Numbers up to 10

1. Add the following as shown below.

Example:



a.



$$2 + 8 = 10$$

two plus eight equals ten.

b. $4 + 8 =$ _____

c. $3 + 8 =$ _____

d. $5 + 8 =$ _____

e. $7 + 8 =$ _____

f. $9 + 8 =$ _____

g. $10 + 8 =$ _____

2. Add the following.

a. $4 + 8 = \underline{\quad}$

j. $11 + 8 = \underline{\quad}$

b. $3 + 8 = \underline{\quad}$

k. $10 + 8 = \underline{\quad}$

c. $9 + 8 = \underline{\quad}$

l. $12 + 8 = \underline{\quad}$

d. $11 + 8 = \underline{\quad}$

m. $6 + 8 = \underline{\quad}$

e. $2 + 8 = \underline{\quad}$

n. $9 + 8 = \underline{\quad}$

f. $13 + 8 = \underline{\quad}$

o. $8 + 8 = \underline{\quad}$

g. $5 + 8 = \underline{\quad}$

p. $13 + 8 = \underline{\quad}$

h. $1 + 8 = \underline{\quad}$

q. $7 + 8 = \underline{\quad}$

i. $12 + 8 = \underline{\quad}$

r. $14 + 8 = \underline{\quad}$