

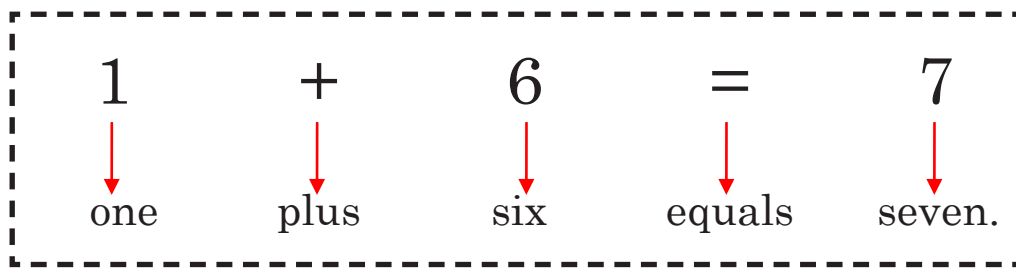
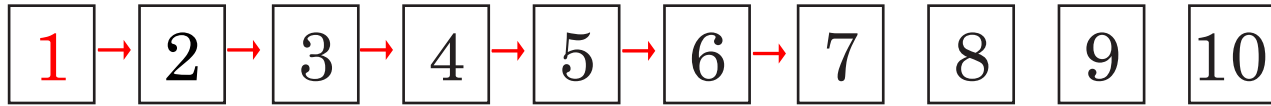
Addition

Unit 20.1

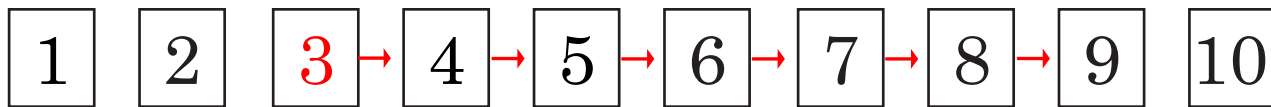
Adding 6 to Numbers up to 7

1. Add the following as shown below.

Example:



a.



$$3 + 6 = 9$$

three plus six equals nine.

b. $2 + 6 =$ _____

c. $3 + 6 =$ _____

d. $5 + 6 =$ _____

e. $6 + 6 =$ _____

f. $4 + 6 =$ _____

g. $7 + 6 =$ _____

2. Add the following.

a. $3 + 6 = \underline{\quad}$

j. $4 + 6 = \underline{\quad}$

b. $8 + 6 = \underline{\quad}$

k. $6 + 6 = \underline{\quad}$

c. $7 + 6 = \underline{\quad}$

l. $5 + 6 = \underline{\quad}$

d. $9 + 6 = \underline{\quad}$

m. $2 + 6 = \underline{\quad}$

e. $1 + 6 = \underline{\quad}$

n. $3 + 6 = \underline{\quad}$

f. $5 + 6 = \underline{\quad}$

o. $7 + 6 = \underline{\quad}$

g. $6 + 6 = \underline{\quad}$

p. $8 + 6 = \underline{\quad}$

h. $4 + 6 = \underline{\quad}$

q. $1 + 6 = \underline{\quad}$

i. $2 + 6 = \underline{\quad}$

r. $9 + 6 = \underline{\quad}$